


Name: \_\_\_\_\_

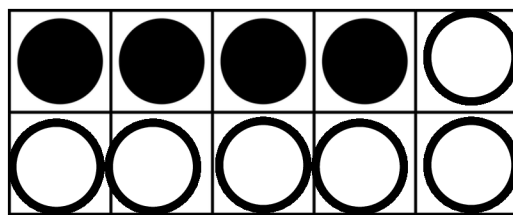
## Making 10 with 10 Frames

Count the black and white counters in each frame.

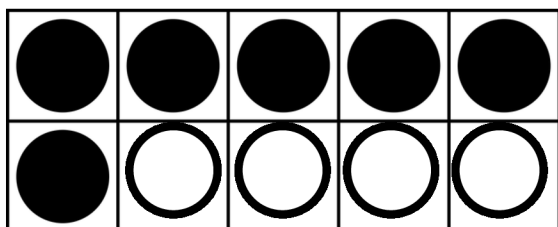
Fill in the blanks.




$$9 + \underline{\quad} = 10$$



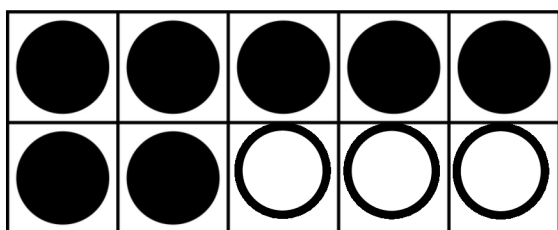
$$4 + \underline{\quad} = 10$$



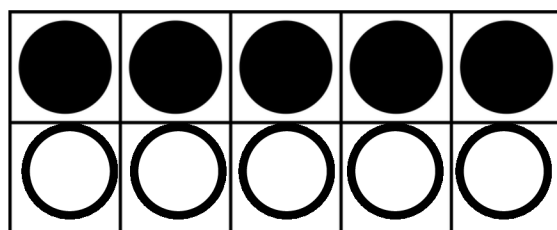
$$\underline{\quad} + 4 = 10$$



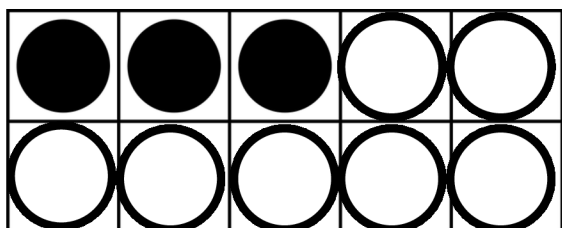
$$\underline{\quad} + 8 = 10$$



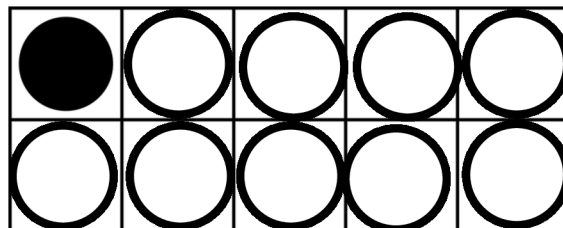
$$7 + \underline{\quad} = 10$$



$$\underline{\quad} + 5 = 10$$



$$3 + \underline{\quad} = 10$$



$$\underline{\quad} + 9 = 10$$